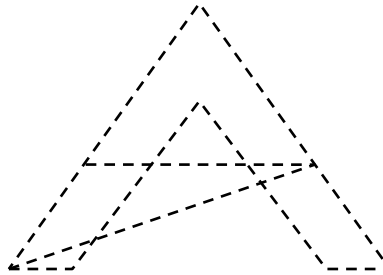
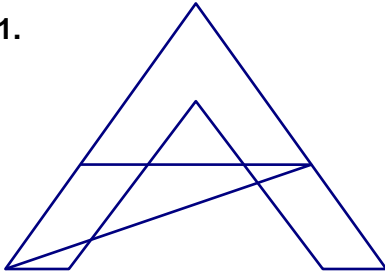




TRAZO DE FIGURAS II

Marca con un aspa en oindicando si se puede o no se puede realizar las figuras de un solo trazo.

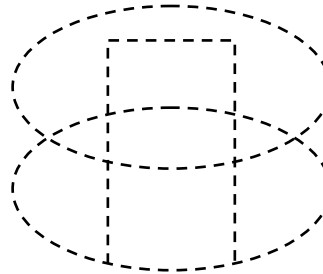
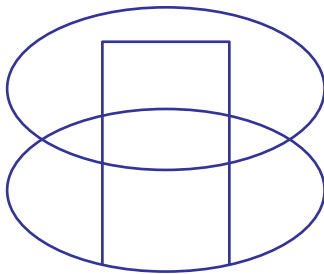
1.



Si

No

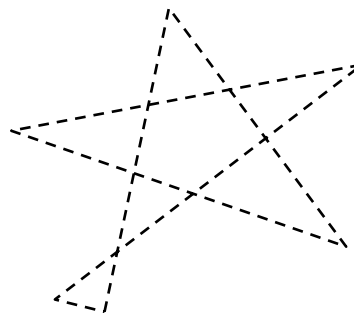
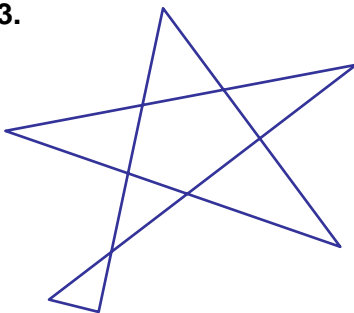
2.



Si


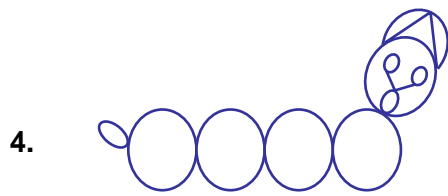
No

3.



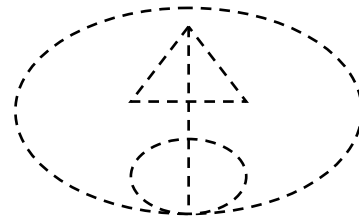
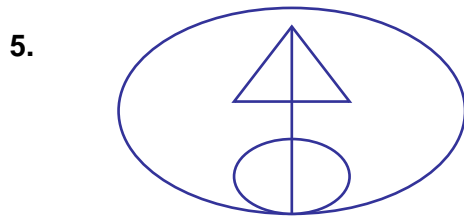
Si

No



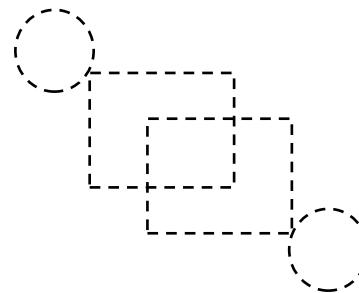
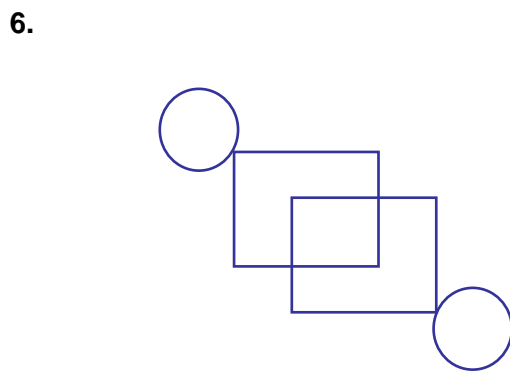
Si

No



Si

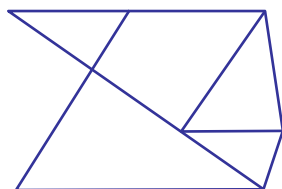
No




Si

No

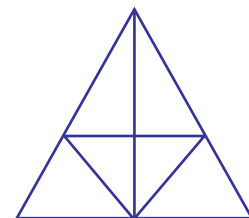
7. ¿Cuál de las siguientes figuras se pueden realizar de un solo trazo?



(I)



(II)



(III)

A) Sólo I

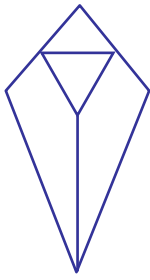
B) Sólo II

C) Sólo III

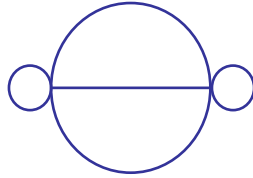
D) I y II

E) II y III

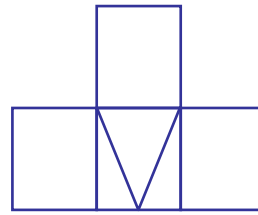
8. Indica qué figuras se puede hacer de un solo trazo.



(I)



(II)



(III)

A) I y II

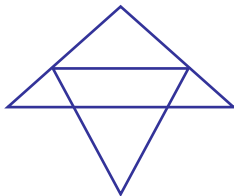
B) II y III

C) I y III

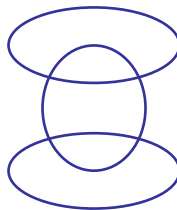
D) II

E) III

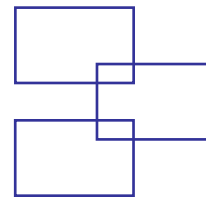
9. Indicar las figuras que no se pueden realizar de un solo trazo.



(I)



(II)



(III)

A) I y II

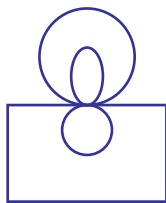
B) II y III

C) I y III

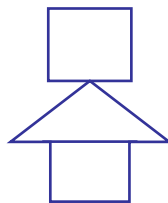
D) Sólo I

E) Sólo III

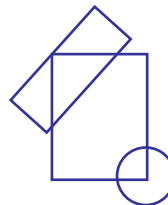
10. Cuántas de las siguientes figuras se pueden realizar de un solo trazo.



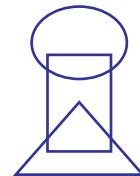
(I)



(II)



(III)



(IV)

A) 0

B) 1

C) 2

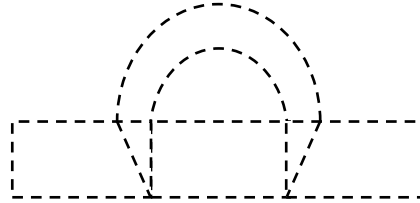
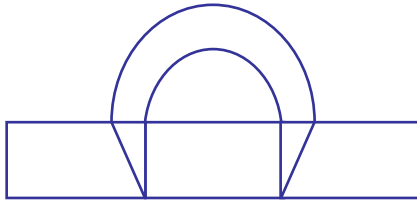
D) 3

E) 4

TAREA PARA MI...

Indicarse puede o.....se puede realizar de un solo trazo.

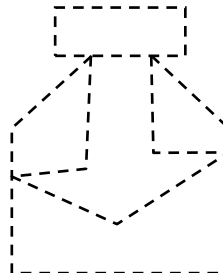
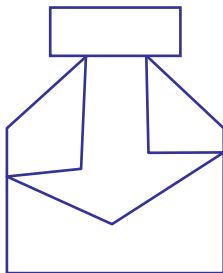
1.



Si

No

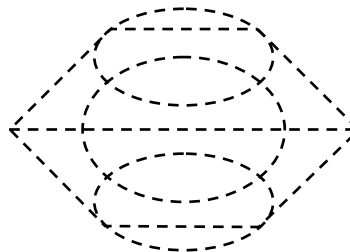
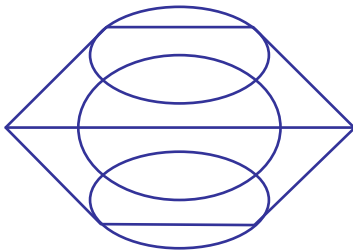
2.



Si

No

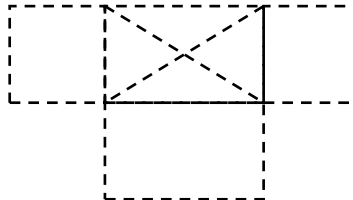
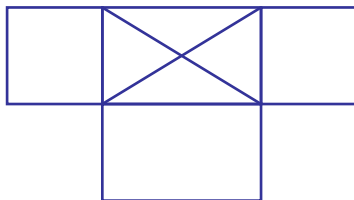
3.



Si

No

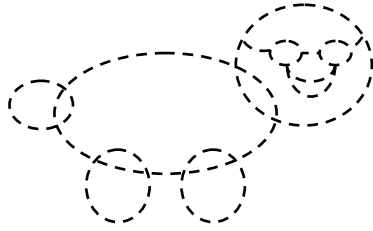

4.



Si

No

5.



Si

No