



# SUMA Y RESTA - LLEVANDO

Suma y resta llevando.

$$\begin{array}{r} \textcircled{1} \\ 1 \ 3 \ 4 \\ + 2 \ 4 \ 9 \\ \hline \textcircled{0} \end{array}$$

$$\begin{array}{r} \textcircled{1} \ \textcircled{1} \\ 1 \ 4 \ 7 \\ + 2 \ 8 \ 3 \\ \hline \textcircled{0} \ \textcircled{0} \end{array}$$

$$\begin{array}{r} 84 \\ + 106 \\ \hline \end{array}$$

$$\begin{array}{r} 125 \\ + 69 \\ \hline \end{array}$$

$$\begin{array}{r} 246 \\ + 139 \\ \hline \end{array}$$

$$\begin{array}{r} 164 \\ + 178 \\ \hline \end{array}$$

$$\begin{array}{r} 259 \\ + 86 \\ \hline \end{array}$$

$$\begin{array}{r} 246 \\ + 157 \\ \hline \end{array}$$

## TRABAJANDO EN EL AULA

1. Ordeno los números y sumo:

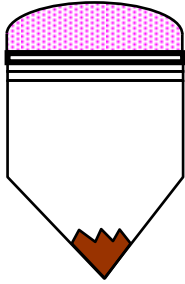
•  $216 + 128 =$

•  $148 + 146 =$

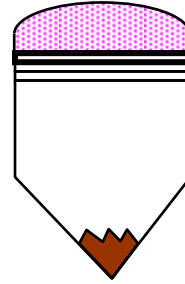
•  $186 + 107 =$

2. Ordeno y hallo la suma total :


•  $124 + 87 + 19 =$



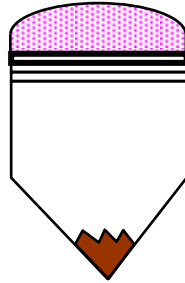
•  $243 + 102 + 15 =$



•  $426 + 82 + 12 =$



•  $140 + 82 + 18 =$



3. Suma y une con una línea con su resultado:

$128 + 79$

$143 + 176$

$196 + 84$

280

319

207

270

$$\begin{array}{r} \bigcirc \quad \bigcirc \\ 1 \quad 2 \quad 3 \\ - \quad 5 \quad 8 \\ \hline \end{array}$$

$$\begin{array}{r} \bigcirc \quad \bigcirc \\ 1 \quad 7 \quad 0 \\ - \quad 4 \quad 6 \\ \hline \end{array}$$

4. Colorea de verde las hojas cuyos resultados sean menores que 234 y de anaranjado las hojas cuyos resultados son mayores que 246.



465  
- 156



368  
- 209



270  
- 68



462  
- 326



381  
- 294



420  
- 253




357  
- 268




203  
- 165

Efectúo las operaciones combinadas:


•  $243 + 165 - 307 =$




•  $252 - 168 + 96 =$




•  $400 - 128 - 203 =$




•  $456 - 268 + 190 =$



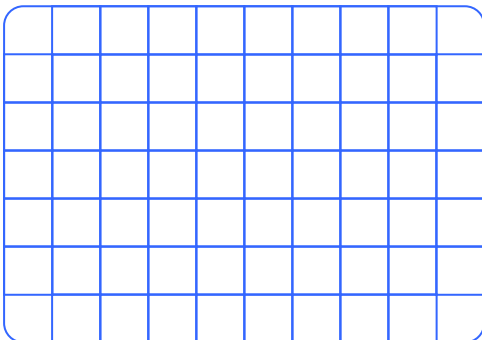
•  $360 - 197 - 48 =$



•  $409 - 165 + 209 =$



•  $268 + 148 - 253 =$



•  $326 + 96 - 419 =$



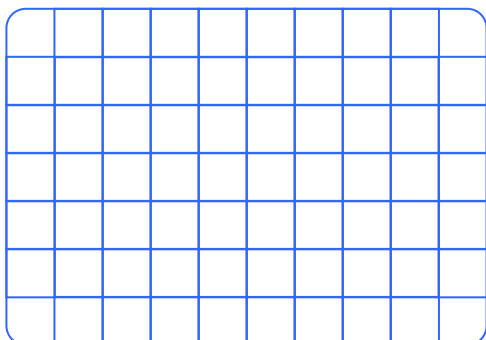
## TAREA PARA MI...

1. Colorea las piezas con resultados mayores que 200 y menores que 300 y encontrarás una letra.

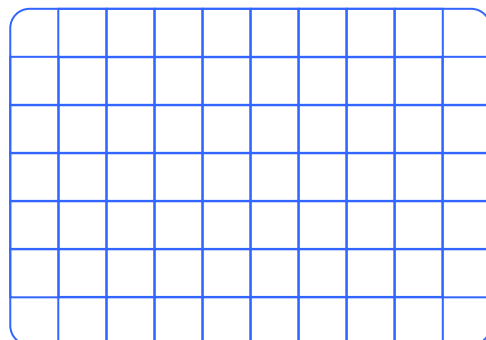
$\begin{array}{r} 241 \\ + 169 \\ \hline \end{array}$	$\begin{array}{r} 283 \\ + 168 \\ \hline \end{array}$	$\begin{array}{r} 425 \\ - 288 \\ \hline \end{array}$	$\begin{array}{r} 312 \\ - 143 \\ \hline \end{array}$
$\begin{array}{r} 435 \\ - 246 \\ \hline \end{array}$	$\begin{array}{r} 196 \\ + 98 \\ \hline \end{array}$	$\begin{array}{r} 200 \\ - 65 \\ \hline \end{array}$	$\begin{array}{r} 147 \\ + 326 \\ \hline \end{array}$
$\begin{array}{r} 99 \\ + 146 \\ \hline \end{array}$	$\begin{array}{r} 148 \\ + 103 \\ \hline \end{array}$	$\begin{array}{r} 456 \\ - 168 \\ \hline \end{array}$	$\begin{array}{r} 325 \\ - 117 \\ \hline \end{array}$
$\begin{array}{r} 166 \\ + 137 \\ \hline \end{array}$	$\begin{array}{r} 107 \\ + 124 \\ \hline \end{array}$	$\begin{array}{r} 302 \\ - 84 \\ \hline \end{array}$	$\begin{array}{r} 468 \\ - 199 \\ \hline \end{array}$

**2. Efectúo las operaciones combinadas:**


•  $243 + 97 - 308 =$



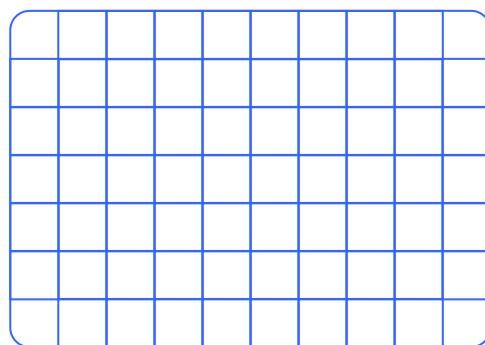
•  $300 - 253 + 76 =$




•  $168 - 99 + 146 =$



•  $420 - 186 + 37 =$



•  $480 - 266 - 124 =$



•  $316 + 96 - 257 =$

