



# ADICIONES LLEVANDO


Observo a 39 varones y 26 mujeres ingresando al circo. ¿Cuántas personas ingresaron en total?

$$\begin{array}{r}
 \textcircled{3} \\
 39 \\
 + 26 \\
 \hline
 \square \textcircled{0} \square
 \end{array}$$

Ingresaron.....personas.

Trabajando en el aula

1. Efectúo la adición:



2. Ordena en columna y hallo la suma:

•  $23 + 49 =$

•  $38 + 31 =$

•  $46 + 17 =$

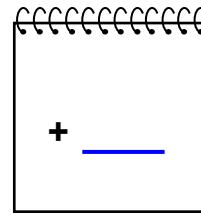
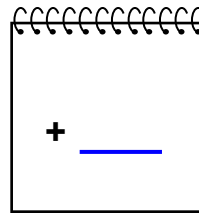
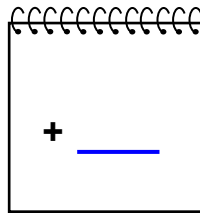
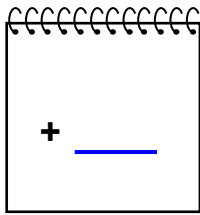
•  $59 + 16 =$

•  $36 + 27 =$

•  $18 + 28 =$

•  $45 + 26 =$

•  $34 + 26 =$



3. Escribe las cifras que faltan:

$$\begin{array}{r} \square 6 \\ + 2 \square \\ \hline 69 \end{array}$$

$$\begin{array}{r} 4 \square \\ + \square 7 \\ \hline 80 \end{array}$$

$$\begin{array}{r} 3 \square \\ + 49 \\ \hline \square 5 \end{array}$$



$$\begin{array}{r} 49 \\ + \square 4 \\ \hline 6 \square \end{array}$$

$$\begin{array}{r} 2 \square \\ + 36 \\ \hline \square 0 \end{array}$$

$$\begin{array}{r} \square 9 \\ + 3 \square \\ \hline 76 \end{array}$$

¡Ayuda a encontrar el queso al ratoncito...!


4. Colorea las piezas con resultados mayores que 60 de azul y los menores de rojo y así encontrarás el camino.

	$\begin{array}{r} 16 \\ + 29 \\ \hline \end{array}$	$\begin{array}{r} 48 \\ + 23 \\ \hline \end{array}$	$\begin{array}{r} 34 \\ + 48 \\ \hline \end{array}$
$\begin{array}{r} 19 \\ + 16 \\ \hline \end{array}$	$\begin{array}{r} 24 \\ + 17 \\ \hline \end{array}$	$\begin{array}{r} 17 \\ + 28 \\ \hline \end{array}$	$\begin{array}{r} 25 \\ + 53 \\ \hline \end{array}$
$\begin{array}{r} 42 \\ + 29 \\ \hline \end{array}$	$\begin{array}{r} 36 \\ + 40 \\ \hline \end{array}$	$\begin{array}{r} 36 \\ + 16 \\ \hline \end{array}$	$\begin{array}{r} 41 \\ + 24 \\ \hline \end{array}$
$\begin{array}{r} 52 \\ + 19 \\ \hline \end{array}$	$\begin{array}{r} 46 \\ + 28 \\ \hline \end{array}$	$\begin{array}{r} 27 \\ + 28 \\ \hline \end{array}$	

5. • Si:

$$\begin{array}{r} \overline{A\ 4} \\ + \overline{3\ B} \\ \hline 5\ 6 \end{array}$$


Halla:  $A + B$



• Dado que:

$$\begin{array}{r} \overline{X\ 7} \\ + \overline{2\ Y} \\ \hline 7\ 0 \end{array}$$

Halla:  $X - Y$




• Si:

$$\begin{array}{r} \heartsuit\ 8 \\ + \overline{3\ \spadesuit} \\ \hline 7\ 2 \end{array}$$



Halla:  $\heartsuit + \spadesuit$




• De:

$$\begin{array}{r} \diamond\ 5 \\ + \overline{2\ \square} \\ \hline 6\ 1 \end{array}$$



Halla:  $\square - \diamond$



TAREA PARA MI...

1. Efectúa las sumas y pinta de verde las peras cuyo valor esté entre 46 y 64.

$$\begin{array}{r} 26 \\ + 34 \\ \hline \end{array}$$

$$\begin{array}{r} 38 \\ + 29 \\ \hline \end{array}$$

$$\begin{array}{r} 19 \\ + 38 \\ \hline \end{array}$$

$$\begin{array}{r} 36 \\ + 25 \\ \hline \end{array}$$

$$\begin{array}{r} 32 \\ + 28 \\ \hline \end{array}$$

$$\begin{array}{r} 48 \\ + 28 \\ \hline \end{array}$$

$$\begin{array}{r} 19 \\ + 59 \\ \hline \end{array}$$

$$\begin{array}{r} 29 \\ + 36 \\ \hline \end{array}$$

2. Escribe las cifras que faltan:

$$\begin{array}{r} \square 8 \\ + 26 \\ \hline 7 \square \end{array}$$

$$\begin{array}{r} 3 \square \\ + 32 \\ \hline \square 0 \end{array}$$

$$\begin{array}{r} 16 \\ + \square 9 \\ \hline 6 \square \end{array}$$

$$\begin{array}{r} 3 \square \\ + \square 2 \\ \hline 61 \end{array}$$

$$\begin{array}{r} 2 \square \\ + 49 \\ \hline \square 9 \end{array}$$

$$\begin{array}{r} \square 9 \\ + 34 \\ \hline 6 \square \end{array}$$