



# ADICION DE NUMEROS

Naturales Menores que 40 (Llevando)

Observa cómo se efectúa la suma “llevando”.

En el tablero de valor posicional:

$$\begin{array}{r} \textcircled{1} \\ 26 \\ + 8 \\ \hline 3\textcircled{1}4 \end{array}$$

$$\begin{array}{r} \textcircled{1} \\ 18 \\ + 17 \\ \hline 3\textcircled{1}5 \end{array}$$

$$\begin{array}{r} \textcircled{1} \\ 19 \\ + 13 \\ \hline 3\textcircled{1}2 \end{array}$$

## TRABAJANDO EN EL AULA

1. Efectúa la adición:

$$\begin{array}{r} \textcircled{\phantom{0}} \\ 14 \\ + \phantom{0}9 \\ \hline \end{array}$$

$$\begin{array}{r} \textcircled{\phantom{0}} \\ 15 \\ + \phantom{0}8 \\ \hline \end{array}$$

$$\begin{array}{r} \textcircled{\phantom{0}} \\ 17 \\ + \phantom{0}7 \\ \hline \end{array}$$

$$\begin{array}{r} \textcircled{\phantom{0}} \\ 19 \\ + \phantom{0}9 \\ \hline \end{array}$$

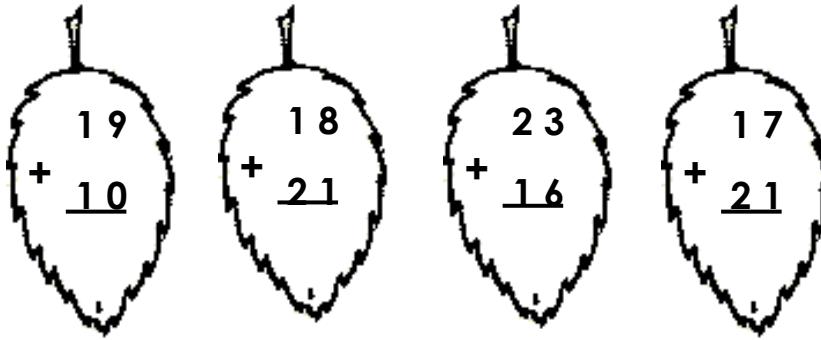
$$\begin{array}{r} \textcircled{\phantom{0}} \\ 16 \\ + 16 \\ \hline \end{array}$$

$$\begin{array}{r} \textcircled{\phantom{0}} \\ 18 \\ + 15 \\ \hline \end{array}$$

$$\begin{array}{r} \textcircled{\phantom{0}} \\ 19 \\ + 14 \\ \hline \end{array}$$

$$\begin{array}{r} \textcircled{\phantom{0}} \\ 18 \\ + 17 \\ \hline \end{array}$$

2. Colorea de verde las hojas cuyo resultado sea 39.



3. Escribe los números que van en el

·  $14 + \quad = 23$

·  $16 + \quad = 36$

·  $\quad + 17 = 26$

·  $\quad + 10 = 38$

·  $16 + \quad = 28$

·  $30 + \quad = 39$

·  $\quad + 19 = 29$

·  $\quad + 13 = 35$

4. Suma y ordena los resultados de mayor a menor:

·  $29$   
+  $9$   
\_\_\_\_\_

·  $16$   
+  $14$   
\_\_\_\_\_

·  $13$   
+  $19$   
\_\_\_\_\_

·  $15$   
+  $16$   
\_\_\_\_\_

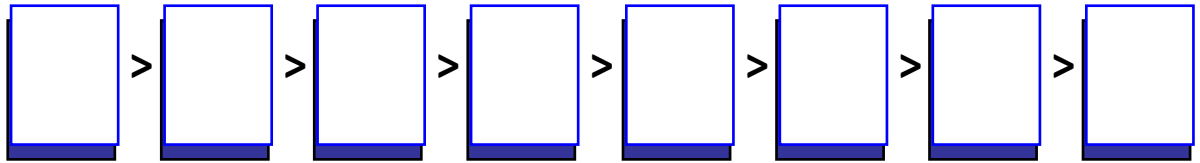
·  $22$   
+  $13$   
\_\_\_\_\_

·  $18$   
+  $15$   
\_\_\_\_\_

·  $14$   
+  $20$   
\_\_\_\_\_

·  $18$   
+  $18$   
\_\_\_\_\_

Ordenando es:



TAREA PARA MI...

1. Efectúa la adición:

$$\begin{array}{r} 20 \\ + 14 \\ \hline \end{array}$$

$$\begin{array}{r} 17 \\ + 13 \\ \hline \end{array}$$

$$\begin{array}{r} 19 \\ + 15 \\ \hline \end{array}$$

$$\begin{array}{r} 16 \\ + 15 \\ \hline \end{array}$$

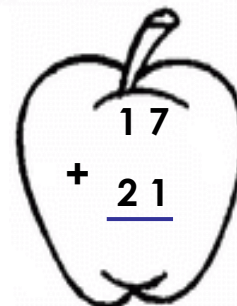





$$\begin{array}{r} 19 \\ + 11 \\ \hline \end{array}$$

$$\begin{array}{r} 16 \\ + 17 \\ \hline \end{array}$$


$$\begin{array}{r} 18 \\ + 16 \\ \hline \end{array}$$

$$\begin{array}{r} 20 \\ + 16 \\ \hline \end{array}$$


2. Colorea las manzanas cuyo resultado sea mayor de 35.




3. Une cada operación con su resultado:



12  
+ 18  
-----



13  
+ 19  
-----



17  
+ 18  
-----



4. Escribe los números que van en el espacio vacío de cada ejemplo.

· 12 +      = 22

·      + 18 = 30

· 17 +      = 28

·      + 16 = 37

·      + 19 = 32

· 13 +      = 32