





CONOCE LOS NUMEROS 11 AL 15

Cuenta y marca con una "X" 11 elementos y colorea.

Escribe el número varias veces.

11



11								
----	--	--	--	--	--	--	--	--


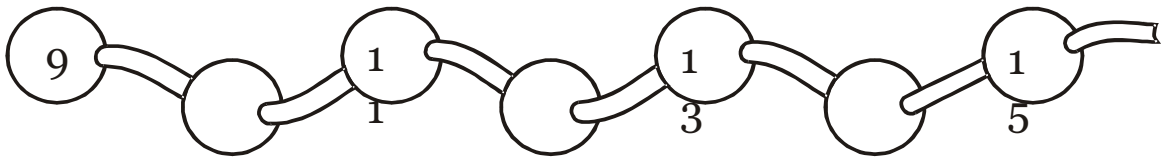
11								
----	--	--	--	--	--	--	--	--

11								
----	--	--	--	--	--	--	--	--

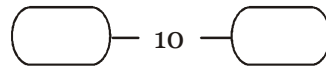
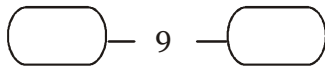
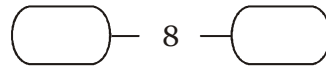
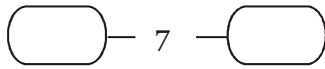
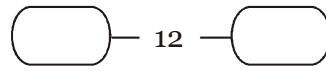
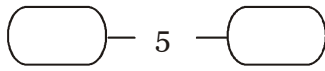
11								
----	--	--	--	--	--	--	--	--

11								
----	--	--	--	--	--	--	--	--

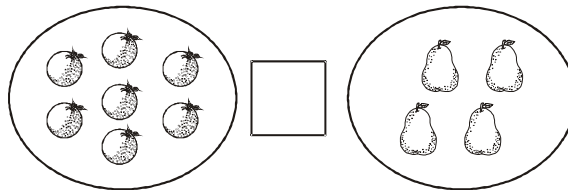
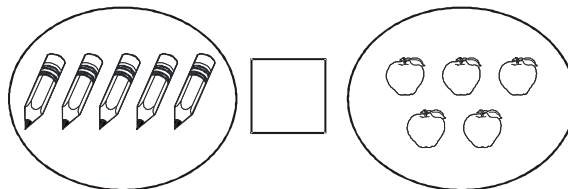
Escribe los números del 1 - 15.



Escribe los números que van antes - después



Coloca el signo > < =



Un conjunto de 10 elementos se llama Decena.

Observa y cuenta:

10 unidades \rightarrow **1** decena



Cuenta y rodea una decena.

10

10

10

10